



SUGHAR SINGH ACADEMY (SWARN JAYANTI VIHAR)
SUMMER VACATION HOLIDAY HOMEWORK (2024-25)
CLASS-II

English Literature	1- Read and learn question/answers and practice exercises of Ch-1 and 2 from book and notebook. 2- Cursive strokes:- Do 1 page writing daily in book.
English Language	1- Take out the printout of the given worksheet, solve and paste it in your English language notebook. 2- Project work: - Make a colourful collage of Kinds of Noun (Common, Proper and collective). Paste or draw 2 pictures of each and make sentence with it. Do the project work on A-4 size sheet. "Students you are advised to do Project work as per your creativity"
Maths	1. Take out the printout of the given worksheet, solve and paste it in your Maths notebook. 2. Learn tables 2 to 14 and write in your All in one notebook. 3. Mental Maths:- Do pg no. 17,29, 41, 49, 53 in your book.
E.V.S	1- Learn Ch-2 and Ch-3 from book and notebook. Project work: - Paste wrappers of any 4 Milk products on an art sheet and decorate it. "Students you are advised to do Project work as per your creativity"
Hindi Literature	हिंदी पाठमाला:- समस्त अभ्यास कार्य को याद करें। रचनात्मक कार्य पाठ- 3प्यारे हमारे पेड़ -पाठ से एक पेड़ का चित्र आर्ट पेज पर बनाएं और उसमें रंग भी भरें अथवा 5 लाइन लिखिए। हिंदी सुलेख:- पुस्तिका में पेज नंबर 1 से 10 तक सुलेख का कार्य करें।
Hindi Language	हिन्दी भाषा:- दिए गए कार्य पत्रक को हल करके हिन्दी भाषा की पुस्तिका में चिपकाए।
Computer	Learn Question/ answers and exercises of Ch:- 1 and Ch -2 Project work:- Paste or draw colourful pictures of 4 places where computers are used on an art sheet and write 2 points about each. "Students you are advised to do Project work as per your creativity"

SUGHAR SINGH ACADEMY (SWARN JAYANTI VIHAR)

Summer Holiday Homework Worksheet (2024-25)

CLASS-2

SUBJECT:-ENGLISH LANGUAGE

Name:- _____

Date:- _____

Q1. Circle the Proper Noun with blue colour in the following sentences:-

- (a) My favourite city is Chicago.
- (b) Taj Mahal is in Agra.
- (c) Mr Gupta brought new Car.
- (d) Riya is very intelligent girl.

Q2.- Circle the Common Noun with red colour in the following sentences:-

- (a) The book belongs to the girl.
- (b) The teacher is very busy.
- (c) India is a big country.
- (d) Ahmed is a brave boy.

Q 3.- Fill in the blanks with the missing letters to make meaningful words:-

- (a) T _ _ AC _ _ E _ _.
- (b) F _ _ O W _ _ R.
- (c) R _ _ B B _ _ T.
- (d) C _ _ M _ _ U T _ _ R.

Q 4.- Punctuate the following sentences in capital letters and with correct Punctuation marks:-

a) riya and siya are best friends

b) shimla is a hill station



c) where is your pen and notebook

d) how wonderful the place is



Q5. Write the opposites of the underlined words :-

a)  The girl is beautiful but the man is 

b)  The tea is hot but the juice is 

c)  The girl is wet but the shirt is 

d)  The elephant is big but the mouse is 

e)  The stick is thin but the book is 

Q 6. Write 10 lines on the given topic:-

"My School"

1. _____
2. _____
3. _____
4. _____
5. _____
6. _____
7. _____
8. _____
9. _____
10. _____

Q7. Picture composition :-

Look at the given picture below and frame 8 sentences from what the picture suggests you:-



1. _____
2. _____
3. _____
4. _____
5. _____
6. _____
7. _____
8. _____

नीचे दिए गए शब्दों को सही जगह भरकर कहानी पूरी करो।

तरकीब बंदूक दर्द तट बहता-बहता निशाना दया उधर
मन-ही-मन प्राणों चीख जान धन्यवाद नज़र उपकार
बाहर डंक चुकाना बह रही है हो कर चूक डूबने
रक्षा पत्ता झटपट छोटी-सी निकट चढ़कर

नदी के पर एक पेड़ पर एक चिड़िया रहती थी। एक दिन उसने देखा कि एक मधुमक्खी नदी के पानी में। चिड़िया को उस पर आ गई। उसे उसकी बचाने की एक सूझी। उसने पेड़ से एक तोड़कर नदी में फेंक दिया। पत्ता मधुमक्खी तक पहुँच गया। मधुमक्खी उस पत्ते पर पानी से आ गई और से बच गई। मधुमक्खी ने चिड़िया को दिया। कुछ दिनों के बाद एक शिकारी आ निकला। उसने अपनी से चिड़िया को मारने की सोची। वह लगाने ही वाला था कि मधुमक्खी की उस पर पड़ गई। उसने सोचा, “एक दिन चिड़िया ने मेरे की की थी, आज मुझे भी उसके का बदला चाहिए। वह उड़कर शिकारी के पहुँची और उसके हाथ पर मारा। शिकारी से पड़ा। उसके हाथ से बंदूक छूट गई। उसका निशाना गया, चिड़िया की जान बच गई। किसी ने सच कहा है— भला, भला।

SUGHAR SINGH ACADEMY (SWARNA JAYANTI VIHAR)
SUMMER HOLIDAY HOMEWORK WORK SHEET (2024-25)

CLASS-2

SUBJECT:-MATHEMATICS

Name:- _____

Date:- _____

Q1. Write the number name of the following:-

- a) 570:- _____
- b) 354:- _____
- c) 499:- _____
- d) 108:- _____

Q2. Write the numeral of the following:-

- a) Two hundred thirty nine :- _____
- b) Six hundred seventy one :- _____
- c) Five hundred forty four :- _____

Q 3. Dodging:-

- a) $7 \times 5 =$ _____
- b) $3 \times \underline{\quad} = 27$
- c) $\underline{\quad} \times 6 = 24$
- d) $9 \times 4 =$ _____
- e) $8 \times \underline{\quad} = 48$

Q 4. Fill in the blanks:-

- a) I am the addition of (9tens and 4ones) _____
- b) The _____ number tells the position of the things.
- c) I am greater than 234 but less than 236 _____.
- d) What comes after 569 _____.

Q 5. Add the following :-


- a) $10 + 5 =$ _____
- b) $7 + 8 =$ _____
- c) $9 + 9 =$ _____
- d) $12 + 5 =$ _____
- e) $14 + 7 =$ _____

Q 6. Draw the abacus:-

a) 808

b) 657




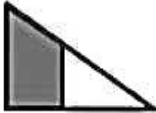
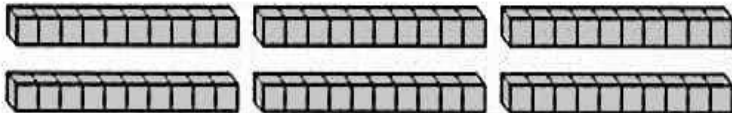


Q 7.



Complete the sentences with the correct ordinal numbers.

- 1- The fifth floor is painted red.
- 2- There is a balcony on the floor.
- 3- There is a dog on the floor.
- 4- There is only one window on the floor.
- 5- There are flowers on the floor.
- 6- There is a boy on the floor.
- 7- The floor is under the second floor.
- 8- The floor is under the roof.
- 9- The floor is painted purple.
- 10- There are yellow curtains on the floor.

Q 8. Mental Maths :-

1) 14 subtract 10	
2) $60 + 7$	
3) Write down the number ninety five.	
4) Tick the shapes that are half shaded. <div style="display: flex; justify-content: space-around; align-items: center; margin-top: 10px;">     </div>	
5) A large bag of flour weighs 2 kg. How much do 6 bags of flour weigh?	kg
6) How many?  	
7) Circle the smallest number. <div style="text-align: center; margin-top: 20px;"> 72 81 68 159 93 </div>	
8) $10 - \underline{\quad} = 3$	
9) The date is 3 rd June. What will the date be in a week?	
10) What has been done to this shape? flip turn or slide	
11) I have 3 TENS and 3 FIVES. How much money do I have?	₹
12) A can of cola contains about 8 spoons of sugar. How much sugar in 2 cans?	spoons
13) Circle the numbers which are multiples of 5? <div style="text-align: center; margin-top: 20px;"> 32 10 15 18 52 30 </div>	